


Divide by 2

4a. Emma has 18 pieces of chocolate. She gives half of them to Mike.



We will get 8 pieces each.

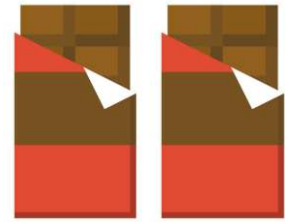
Is Emma correct? Explain why.



R

Divide by 2

4b. Lia has 22 pieces of chocolate. She gives half of them to Joe.



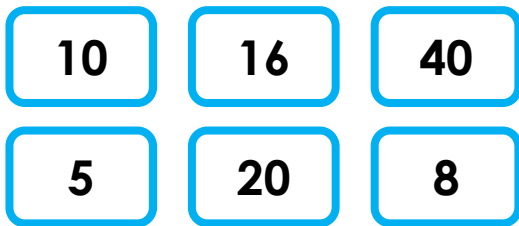
Joe will get 11 pieces.

Is Lia correct? Explain why.



R

5a. Use the digit cards to make 4 division calculations.

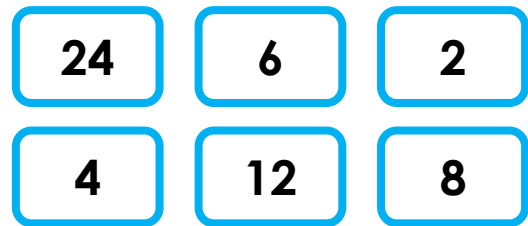


$$\square \div 2 = \square$$



PS

5b. Use the digit cards to make 4 division calculations.



$$\square \div 2 = \square$$



PS

6a. Dad is tidying up and he finds 16 socks.

How many pairs can he make?



He finds 6 more socks. Can he still make pairs?



PS

6b. Sam is tidying up and she finds 24 socks.

How many pairs can she make?



She loses 8 socks. Can she still make pairs?



PS