

2D Shapes

1 Match the shape to its name.

circle

hexagon

pentagon

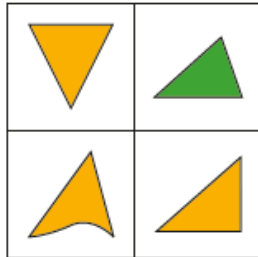
square

triangle

rectangle

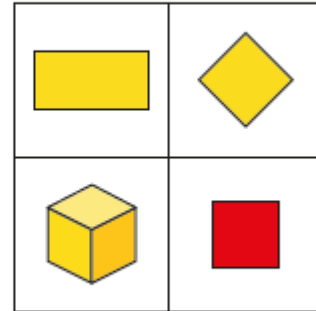
2D Shapes

- 3 Which shape is the odd one out?
Tick your answer. *Various answers.*




Why did you choose this shape?

- 4 Which shape is the odd one out?
Tick your answer. *Various answers.*



Compare answers with a partner.

- 5 Here are some shapes.



Complete the tally chart to show the number of each shape.

Shape	Tally	Total
triangle	11	7
circle		5
square		4
rectangle		3