


2D Shapes




1 Match the shape to its name.




circle



hexagon




pentagon



square



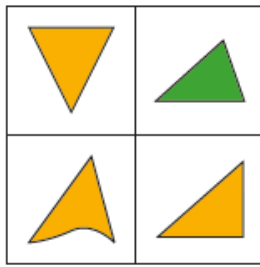
triangle



rectangle

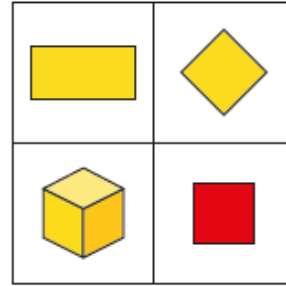
2D Shapes

- 3 Which shape is the odd one out?
Tick your answer.




Why did you choose this shape?

- 4 Which shape is the odd one out?
Tick your answer.



Compare answers with a partner.

- 5 Here are some shapes.



Complete the tally chart to show the number of each shape.

Shape	Tally	Total
triangle		
circle		
square		
rectangle		