

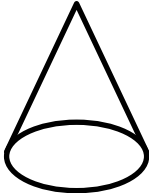
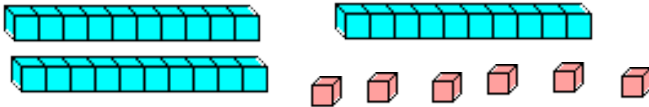




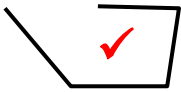





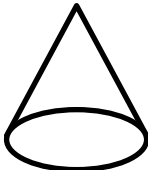
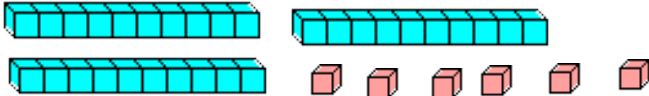
MENTAL MATHS QUIZ 2:6

1)	How many 2s make 10?	
2)	What is the next number in the sequence? 1, 3, 2, 1, 3, 2, 1, 3, 2, 1, ____	
3)	12 minus 4	
4)	Tick the shape that is not a closed figure . 	
5)	$30 + \underline{\quad} = 36$	
6)	How much money? 	£
7)	Circle the name of this shape? cuboid cube cylinder cone sphere	
8)	I have £12. I spend £9. How much do I have left?	
9)	How many? 	
10)	How many minutes in half an hour?	
11)	Sally has 5 marbles. Frazer has 6 more than Sally. How many does Frazer have?	
12)	Circle the digital clock that shows the time half-past 11. <div style="display: flex; justify-content: space-around; align-items: center;"> 11:00 11:15 11:30 12:00 12:30 30:11 </div>	





MENTAL MATHS QUIZ 2:6 ANSWERS

1)	How many 2s make 10?	5
2)	What is the next number in the sequence? 1, 3, 2, 1, 3, 2, 1, 3, 2, 1, ____	3
3)	12 minus 4	8
4)	Tick the shape that is not a closed figure .     	
5)	$30 + \underline{\quad} = 36$	6
6)	How much money? 	£7
7)	Circle the name of this shape? cuboid cube cylinder cone sphere	
8)	I have £12. I spend £9. How much do I have left?	£3
9)	How many? 	36
10)	How many minutes in half an hour?	30
11)	Sally has 5 marbles. Frazer has 6 more than Sally. How many does Frazer have?	11
12)	Circle the digital clock that shows the time half-past 11. 